




A couple of little challenges for you.



Can you identify the well-known characters?



What is the solution for the last number sentence?

$$\text{shoe} + \text{shoe} + \text{shoe} = 30$$

$$\text{boy} + \text{boy} + \text{shoe} = 20$$

$$\text{ice cream} + \text{ice cream} + \text{boy} = 13$$

$$\text{shoe} + \text{boy} \times \text{ice cream} = ?$$