

Spring Test 3

Name: _____ Class: _____ Date: _____

5-second questions


1	
---	--

2	
---	--

3		622
---	--	-----

4	
---	--

5		100
---	--	-----

6		
---	--	---

7	£	£10
---	---	-----


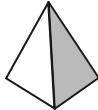

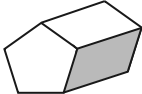
8		34
---	--	----

9	0 100 200 300 _____
---	-----------------------------

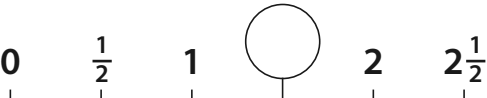
10	$\begin{array}{ccc} & < \\ 57 & > & 75 \\ & = \end{array}$
----	--

10-second questions

11	325 730 501 66 270
----	----------------------------

12	   
----	--

13		10
----	--	----

14	
----	---

15		21
----	--	----

Total marks	/15
-------------	-----

How well did you do?
Colour the numbers of the questions you got right.
Some questions may appear more than once.

Number, place value	1	9	10				
Addition and subtraction	2	3	5				
Multiplication and division	11	13					
Fractions	8	14	15				
Measurement	6	7					
Properties of shapes	12						
Position, direction	4						
Statistics							