

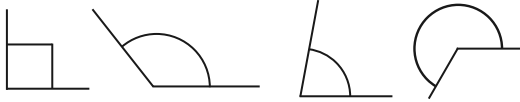
# Spring Test 5

Name: ..... Class: ..... Date: .....

## 5-second questions

<b>1</b>	
----------	--

<b>2</b>	
----------	--

<b>3</b>	
----------	---

<b>4</b>		<b>9</b>
----------	--	----------

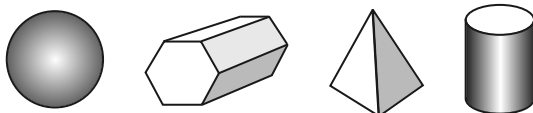
<b>5</b>	
----------	--

<b>6</b>		<b>365</b>
----------	--	------------


<b>7</b>	
----------	--

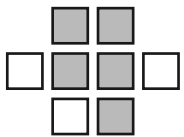
<b>8</b>		<b>16</b>
----------	--	-----------

<b>9</b>		<b>9</b>	<b>6</b>	<b>14</b>
----------	--	----------	----------	-----------

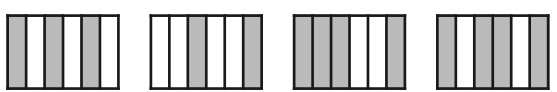
<b>10</b>	
-----------	---

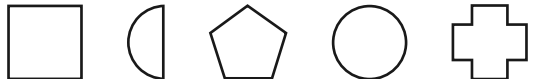
## 10-second questions

<b>11</b>	
-----------	--

<b>12</b>	
-----------	---

<b>13</b>		<b>40</b>	<b>89</b>
-----------	--	-----------	-----------

<b>14</b>	
-----------	---

<b>15</b>	
-----------	--

<b>Total marks</b>	<b>/15</b>
--------------------	------------

### How well did you do?

Colour the numbers of the questions you got right. Some questions may appear more than once.

Number, place value	2	4	6				
Addition and subtraction	1	9	13				
Multiplication and division	5						
Fractions	8	12	14				
Measurement	7	11					
Properties of shapes	3	10	15				
Position, direction							
Statistics							